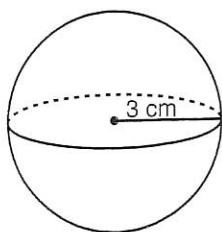
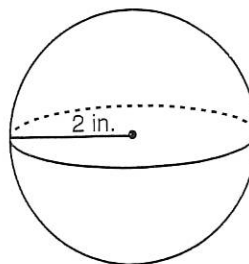


Find the volume of each sphere, round to the nearest hundredth.

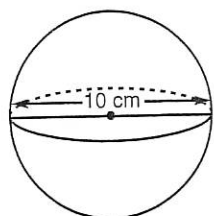
1.



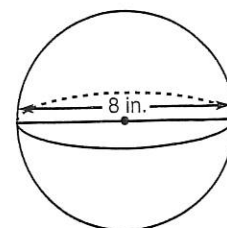
2.



3.



4.



5. What is the volume of a sphere with a radius of 12 inches?

6. What is the difference in volume of a Men's basketball that has a circumference of 29.5 inches and a Women's basketball that has a circumference of 28.5 inches?