

Circumference of a Circle

Find the circumference of a circle with a radius of the given length. Round your answers to the nearest tenth.

1. 3 cm

2. 2 ft

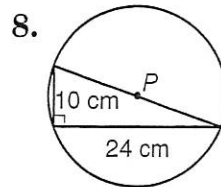
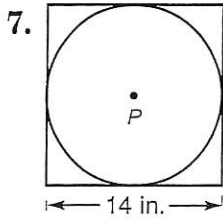
3. 34 mm

4. 4.5 m

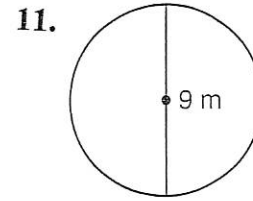
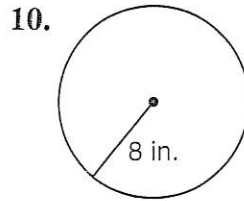
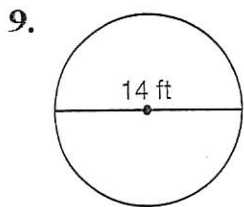
5. 6 cm

6. 5 miles

Find the exact circumference of each circle.



Find the circumference of each circle.



12. The radius is $6\frac{1}{5}$ feet.

13. The diameter is 4.7 yards.

14. The radius of the basketball rim is 9 inches. What is the circumference?