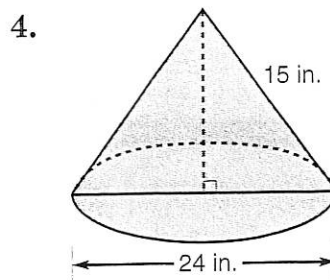
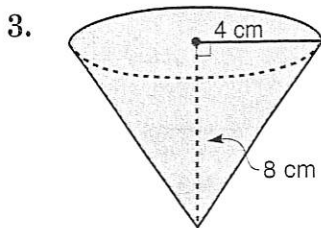
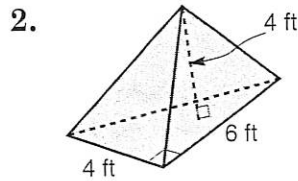
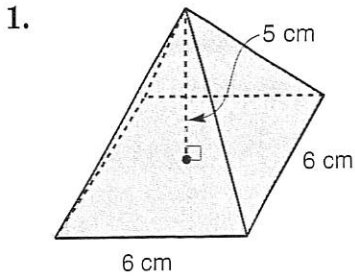


Volumes of Pyramids and Cones

Find the volume of each solid. Round to the nearest hundredth, if necessary.



5. A pyramid has a height of 16 centimeters and a base with area of 84 square centimeters. What is its volume?
6. A cone has a height of 12 inches and a base with a radius of 16 centimeters. Find the volume of the cone.