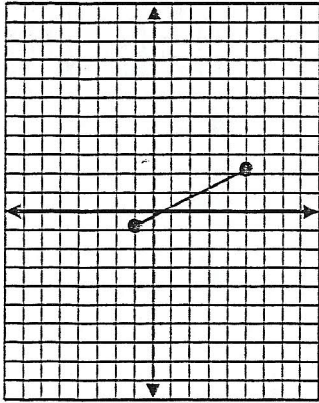


For each problem: a) State the domain
 b) State the range
 c) Determine if the graph is a function

1.

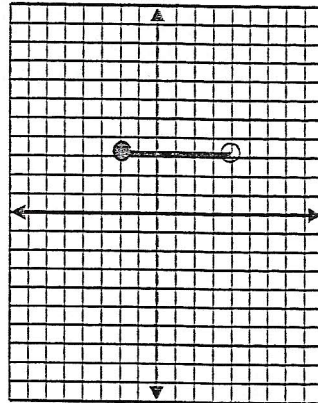


a) _____

b) _____

c) _____

2.

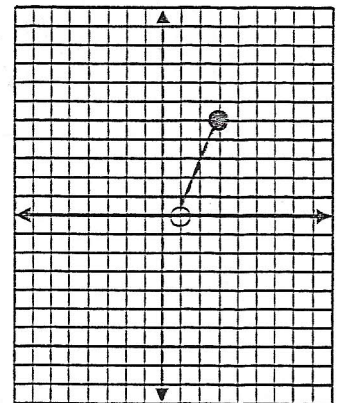


a) _____

b) _____

c) _____

3.

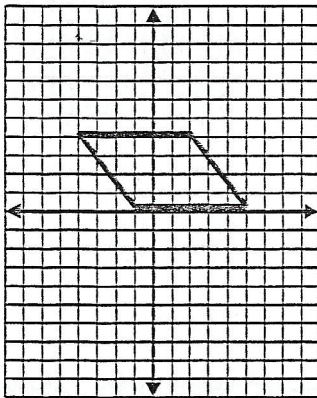


a) _____

b) _____

c) _____

4.

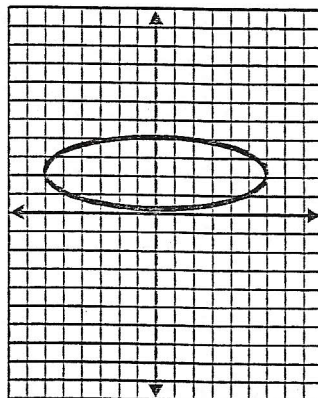


a) _____

b) _____

c) _____

5.

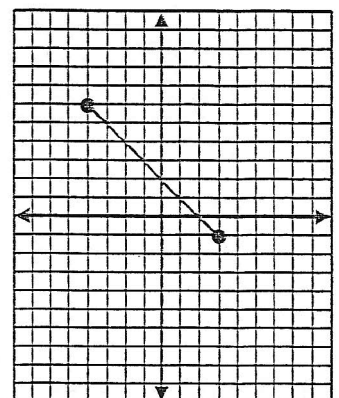


a) _____

b) _____

c) _____

6.



a) _____

b) _____

c) _____