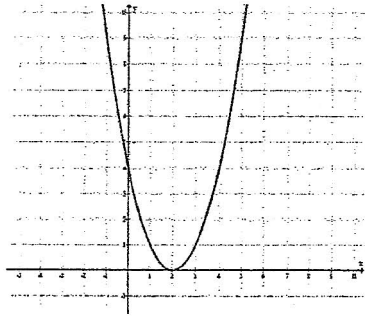


SECONDARY MATH II  
DOMAIN 2 F.IF.4  
FUNCTIONS WORKSHEET 2.1

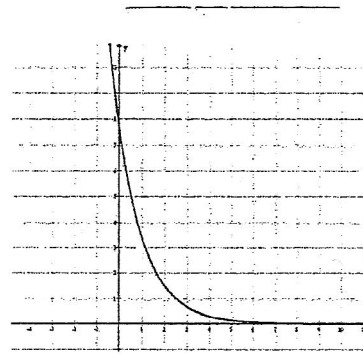
NAME \_\_\_\_\_  
DATE \_\_\_\_\_  
CLASS \_\_\_\_\_

Identify the functions as linear, quadratic or exponential.

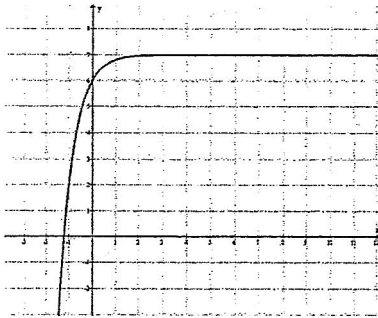
1.



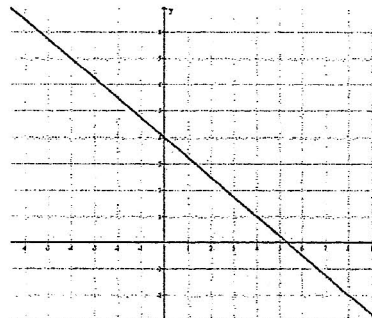
4.



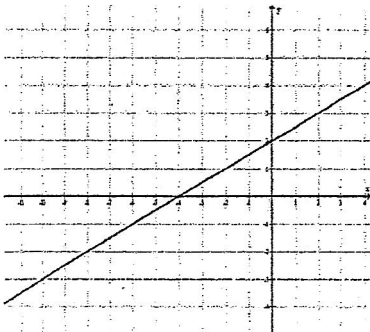
2. \_\_\_\_\_



5. \_\_\_\_\_



3. \_\_\_\_\_



6. \_\_\_\_\_

