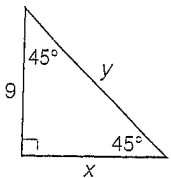


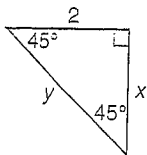
45°-45°-90° Triangles

Find the missing measures. Write all radicals in simplest form.

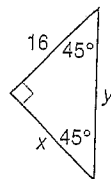
1.



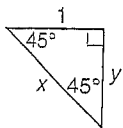
2.



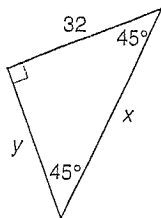
3.



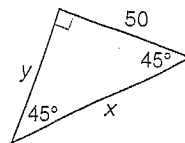
4.



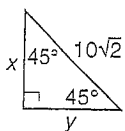
5.



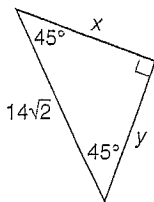
6.



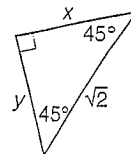
7.



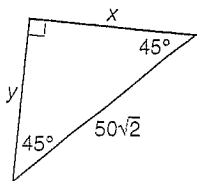
8.



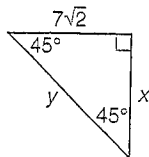
9.



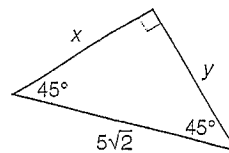
10.



11.



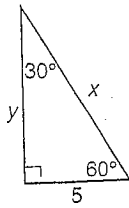
12.



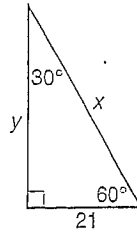
30°-60°-90° Triangles

Find the missing measures. Write all radicals in simplest form.

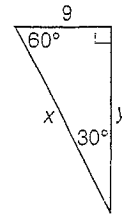
1.



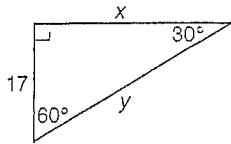
2.



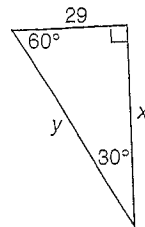
3.



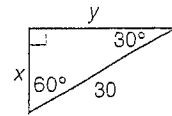
4.



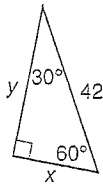
5.



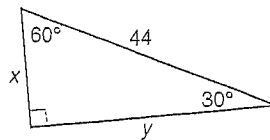
6.



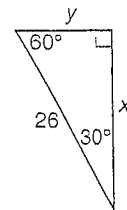
7.



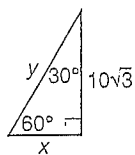
8.



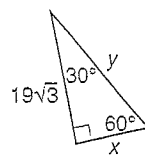
9.



10.



11.



12.

