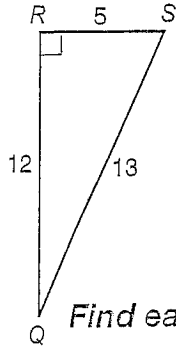
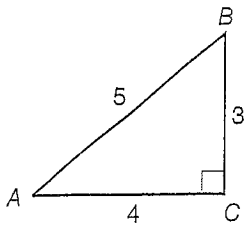


SECONDARY MATH II
 DOMAIN 5 G.SRT.8 TRIG RATIOS
 WS 5.12 TRIG RATIOS

NAME _____
 DATE _____
 CLASS _____

Find each sine or cosine. Round to four decimal places, if necessary.



1. Sin A

2. Sin B

3. Cos Q

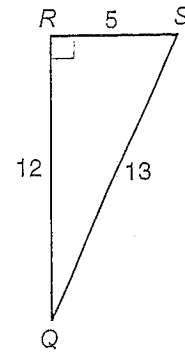
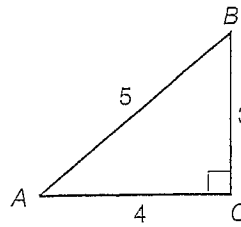
4. Cos S

5. Tan A

6. Tan B

7. Tan S

8. Tan Q



Find each tangent. Round to four decimal places, if necessary.

Find each measure. Round to the nearest tenth.

